

O Level E Maths Tutorial 12: Properties of Circles

Syllabus :

- symmetry properties of circles:
 - equal chords are equidistant from the centre

1. C is the centre of the circle. State the value of x , giving the reason.

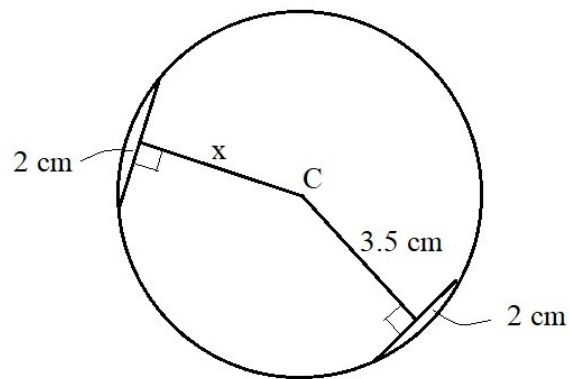


Figure 12-1

- the perpendicular bisector of a chord passes through the centre

2. The length of CD is 4 cm. State, giving reason, the radius of the circle.

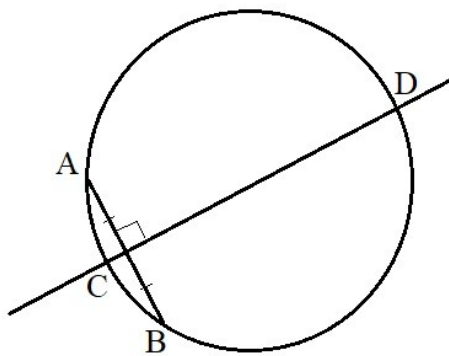


Figure 12-2

- tangents from an external point are equal in length

3. AB in the figure is 10 cm. State the length of AC. Give the reason.

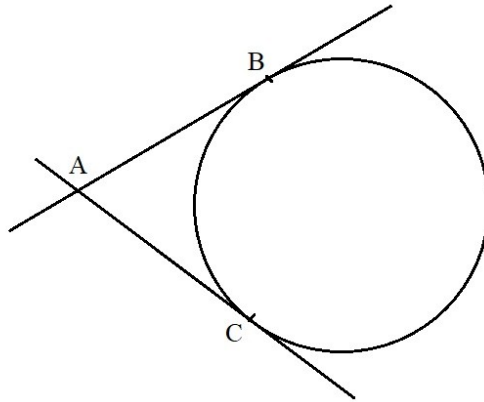


Figure 12-3

- the line joining an external point to the centre of the circle bisects the angle between the tangents

4. A line from point A passes through the centre of the circle. State the value of angle x , giving the reason.

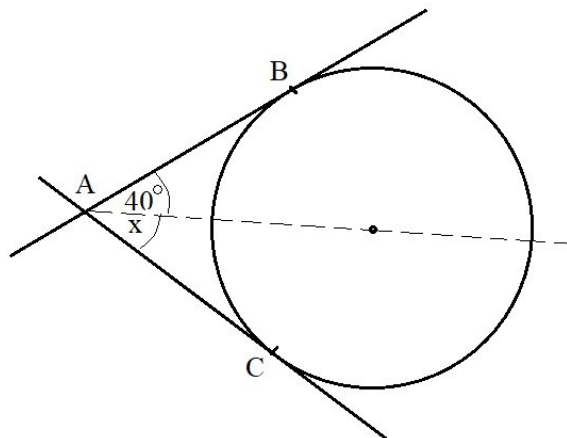


Figure 12-4

-
- angle properties of circles:
 - angle in a semicircle is a right angle
-

5. In this circle, C is the centre. State the angle ABC. Give the reason.

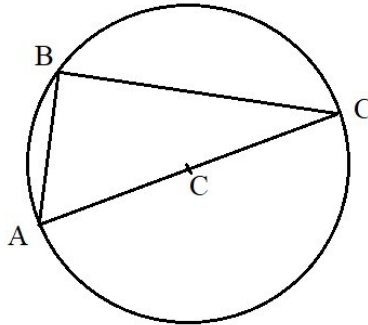


Figure 12-5

-
- angle between tangent and radius of a circle is a right angle
-

6. State the angle x. Give the reason.

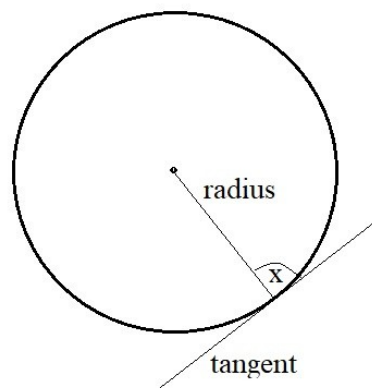


Figure 12-5

- angle at the centre is twice the angle at the circumference

7. Find x . State the reason.

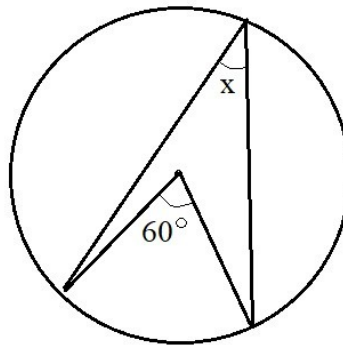


Figure 12-6

- angles in the same segment are equal

8. State the value of angle x . Give the reason.

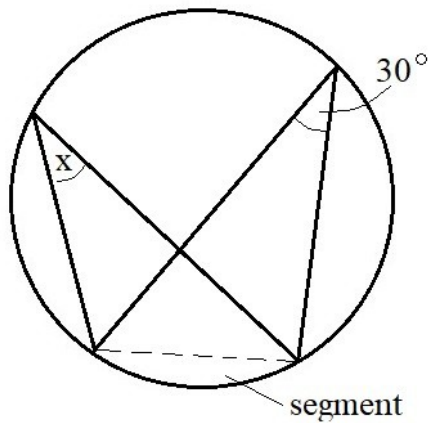


Figure 12-7

- angles in opposite segments are supplementary *

* Supplementary angles are two angles whose measures sum up to 180 degrees.

9. Find x . Give the reason.

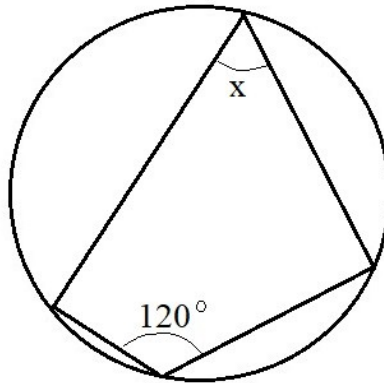


Figure 12-8